



כתבו את התרגיל במאונך ופתרו


$19+5=$




$25+36=$




$13+6=$




$40+23=$




$10+12=$



$62+14=$



$11+37=$



$27+56=$

